



**PRACTICE TEST WITH
SAMPLE TEST ITEMS**

BASED ON GRADE LEVEL STANDARDS

MATH

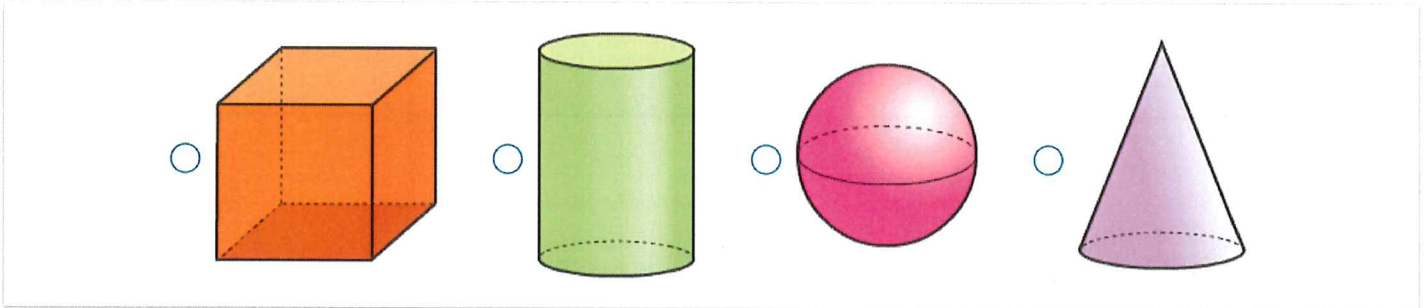
FIRST GRADE

1st Grade NWEA Sample Questions - Math

Have a look at our ~~1st~~ 1st Grade MAP Sample Questions below to get an idea of what to expect on the test.



Question 1

Mark the cone



Question 2


Count the number of short pencils, and place that number in the box labeled short pencils. Count the number of long pencils, and place that number in the box labeled long pencils.

 Short Pencils	 Long Pencils

A horizontal row of six yellow pencils on a blue background. The pencils are arranged in two rows of three. The top row has a short pencil, a long pencil, and a medium-length pencil. The bottom row has a long pencil, a short pencil, and a medium-length pencil.

Question 3


Mark X on the cookies to show $5 - 2 = 3$



Question 4



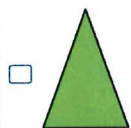
Abigail has 4 balloons. Her friend gave her 2 more balloons.

Draw balloons in the box to show how many balloons Abigail has altogether.



Question 5

Choose ALL the rectangles.



Question 6

Solve: $5 + 7 =$ _____

Solve: $9 + 8 =$ _____

Solve: $8 - 5 =$ _____

Solve: $7 - 4 =$ _____

Question 7

Finish the pattern

ABBC ABBC ABBC ABBC _____

Question 8

Look at Jill, Kim, and Beth.



1. Which girl is tallest?

- A. Jill
 - B. Kim
 - C. Beth
-

Question 9

Mark has the nickels shown below.

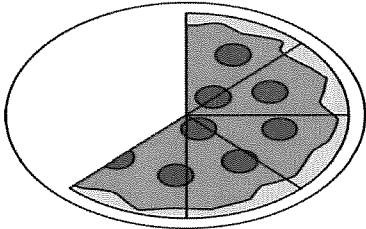


2. Mark is going to trade all of his nickels for pennies. How many pennies should he get?

- A. 20
 - B. 25
 - C. 40
-

Question 10


The pizza below had 8 slices.







3. How many slices are gone?

- A. 2
 - B. 3
 - C. 4
-

Question 11

7. Which numbers are covered by the s in the box below?

1	2		4	5
		8		
11			14	

- A. 5, 6, 10, 15
- B. 3, 6, 9, 12
- C. 4, 8, 12, 15